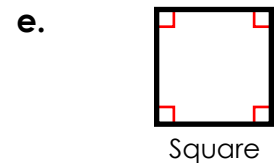
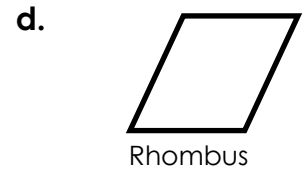
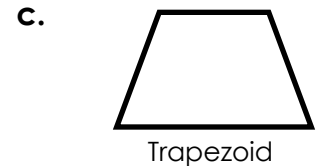
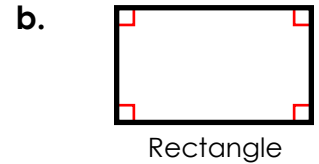
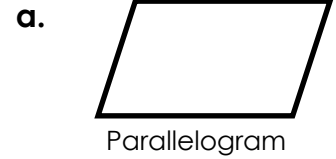


Name: _____

Quadrilaterals

Match the quadrilateral with its definition.

- _____ 1. All sides are the same length.
There are four right angles.
- _____ 2. There is only one pair of parallel sides.
- _____ 3. Opposite sides are parallel and the
same length. There are four right angles.
- _____ 4. There are two pairs of parallel sides.
All sides are the same length.
- _____ 5. There are two pairs of opposite parallel
sides.



6. List two ways a rectangle and square are alike and one way in which they are different.
